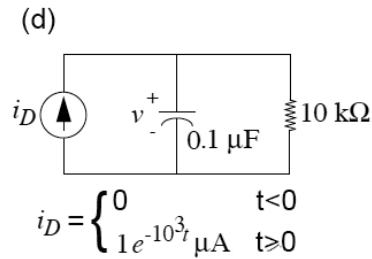
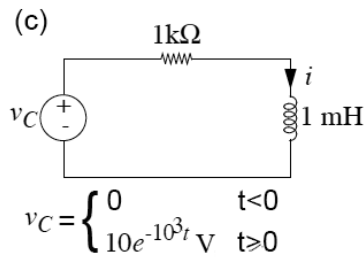
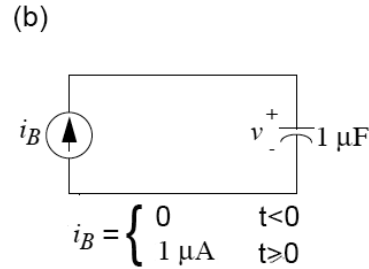
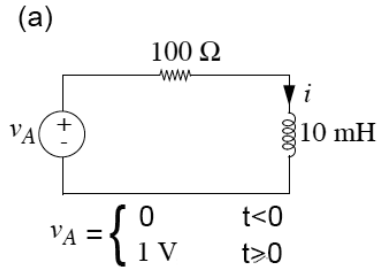


**Final Exam for Physics 120A (closed book)**  
**Thursday 12 June 2014; 8:00 - 11:00 AM**

**Problem 1.**

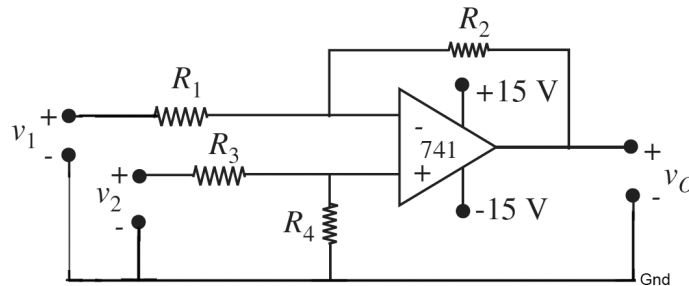
For each of the circuits (a - d) below, find the indicated voltage ( $v$ ) or current ( $i$ ) for all  $t > 0$ . Time "t" is in seconds.



**Problem 2.**

The circuit below is called a differential amplifier.

- Using the ideal Op Amp model (infinite open loop gain, infinite input resistance, zero output resistance) derive an expression for the output voltage  $v_O$  in terms of the input voltages  $v_1$  and  $v_2$  and the resistances  $R_1$ ,  $R_2$ ,  $R_3$ , and  $R_4$ .
- Does connecting a load resistor  $R_L$  between the output and ground change the previous expression for  $v_O$ ? Why?
- Let  $v_1 = v_2$  and  $R_1 = 1 \text{ k}\Omega$ ,  $R_2 = 30 \text{ k}\Omega$ , and  $R_3 = 1.5 \text{ k}\Omega$ . Find  $R_4$  so that  $v_O = 0$ .
- Let  $v_2 = 0$  and  $v_1 = 1 \text{ Volt}$ . Using the preceding resistor values, including that computed for  $R_4$  in part (c), find  $v_O$ .



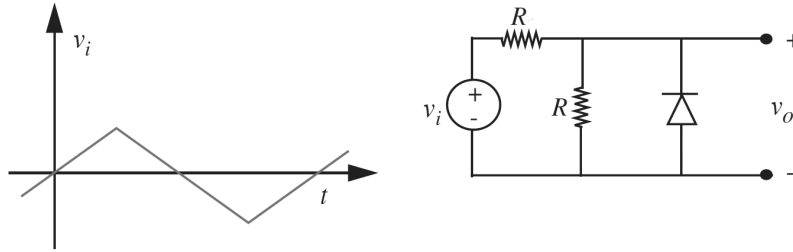
**Problem 3.**

(a) In the circuit below, assume that the diode can be modeled as an ideal diode. Plot the waveform  $v_o(t)$  assuming a triangle wave input for  $v_i(t)$ .

(b) Write an expression for  $v_o(t)$  in terms of  $v_i(t)$  and  $R$ .

(c) If the triangle wave has a peak amplitude of only 2 Volts, a more accurate diode model must be used. Plot the waveform for  $v_o(t)$  assuming that the diode is modeled using an ideal diode in series with a 0.6-Volt source.

(d) Write an expression for  $v_o(t)$  in terms of  $v_i(t)$  and  $R$  assuming that the diode is modeled using an ideal diode in series with a 0.6-Volt source.



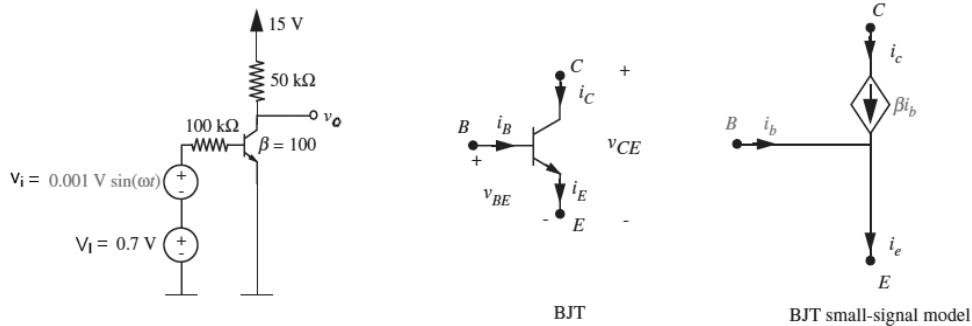
**Problem 4.**

Consider the common emitter BJT amplifier shown below. The input voltage comprises the sum of a DC bias voltage,  $V_I = 0.7$  Volts, and a sinusoid of the form  $v_i(t) = 0.001 \sin(\omega t)$  Volts.

In your analysis of the circuit, you may assume that the amplitude of  $v_i(t)$  is very small compared to  $V_I$ , and that the BJT always operates in its active region. The figure also shows a small-signal model for the BJT in its active region.

Let the output voltage comprise an operating-point voltage  $V_O$  and a small-signal response term  $v_o(t)$ .

- (a) Determine the operating-point voltage  $V_O$  for the input bias of  $V_I = 0.7$  Volts.
- (b) Draw the small-signal equivalent circuit for the amplifier?
- (c) Determine the small-signal gain of the amplifier?
- (d) What is the small-signal response  $v_o(t)$  given the small signal input  $v_i(t)$ ?



**Fini!**